


Lance deux dés, écris l'addition puis calcule.



$1 + 4 = 5$

$..... + =$

$..... + =$

$..... + =$

$..... + =$

$..... + =$

$..... + =$

$..... + =$


$..... + =$

$..... + =$

$..... + =$

$..... + =$

Lance trois dés, écris l'addition puis calcule.



$$5 + 3 + 6 = 14$$

$$\dots + \dots + \dots = \dots$$

$$\dots + \dots + \dots = \dots$$

$$\dots + \dots + \dots = \dots$$

$$\dots + \dots + \dots = \dots$$

$$\dots + \dots + \dots = \dots$$

$$\dots + \dots + \dots = \dots$$

$$\dots + \dots + \dots = \dots$$

$$\dots + \dots + \dots = \dots$$

$$\dots + \dots + \dots = \dots$$


$$\dots + \dots + \dots = \dots$$

$$\dots + \dots + \dots = \dots$$

Prends un jeu de cartes, enlève les valets, les dames et les rois.

l'as = 11

Tire au hasard 2 cartes, écris l'addition puis calcule.



$$4 + 9 = 13$$

$$\dots + \dots = \dots$$

$$\dots + \dots = \dots$$

$$\dots + \dots = \dots$$

$$\dots + \dots = \dots$$

$$\dots + \dots = \dots$$

$$\dots + \dots = \dots$$

$$\dots + \dots = \dots$$

$$\dots + \dots = \dots$$

$$\dots + \dots = \dots$$

$$\dots + \dots = \dots$$

$$\dots + \dots = \dots$$